




Mathematics & English Homework Sheet



Name: _____

Hand in on: _____

A: Number facts

Try not to use a calculator. Have someone time how long it takes you & record this time in the box below.

Adding & Subtracting

- $207 + 52 =$
- $35 + 312 =$
- $138 + 75 =$
- $79 + 473 =$
- $983 - 302 =$
- $898 - 148 =$
- $810 - 225 =$
- $613 - 497 =$

Multiplying & Dividing

- $3 \times 5 =$
- $10 \times 6 =$
- $4 \times 3 =$
- $9 \times 8 =$
- $7 \times 6 =$
- $4 \times 9 =$
- $12 \div 3 =$
- $42 \div 6 =$
- $8 \div 4 =$
- $8 \div 8 =$
- $56 \div 7 =$
- $90 \div 9 =$

Time taken:

D: Alphabetical order

In your homework book, list these words in alphabetical order;

skin, skateboard, skipping, skull, skinny, sky, skeleton, skip

Write sentences using 3 of these words to show you understand their meanings.

Have you spent some time this week learning or revising your.

basic number facts?

Yes / No (circle one)



B: Using the right word


Write 'went' or 'gone' into the spaces in these sentences.

- Yesterday our class to the library.
- The class has for a swim today.
- He has to the new shopping centre to buy shoes.
- Katie outside to bring in the firewood.
- She to her school bag, but her lunch was
- Write 2 sentences of your own using 'went' and 'gone', in your homework book.



C: Pie graphs

This pie graph shows how Martha spent or saved money she was given for her birthday. In this pie graph each sector equals \$20.00.



- How many sectors are there in this pie graph?
- From this, work out how much money she was given for her birthday.
- How much money did she spend when she went to the movies (M)?
- As she spent 1 sector out of 8 on the movies, how would you write this as a fraction?
- How much money did she save (S) and how much money did she spend on new clothes (C)?
- What fraction of her money did she save?



E: Popular phrases

Explain what is meant by the following:

- horse play
- as the crow flies
- a blind alley
- on the nail
- a cock and bull story
- with flying colours
- a dead cert
- a storm in a teacup



Do you have any spelling words to learn this week?
Yes / No (circle one)

F: Metric system

- Measure this line to the nearest mm.
- Measure this line to the nearest cm.
- Convert 535mm to cmcm
- Convert 1360mg to gg
- Add $7.2\text{cm} + 96\text{mm}$
=mm

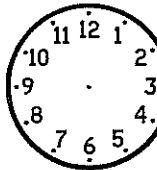
Have you read a book or part of a book this week, just for FUN?

Yes / No (circle one)



G: Time

What is the time on each clock?



-
-
- Draw 20 past seven on the clock.
- Write 10 past 3 as digital time.
- Write 25 to 10 as digital time.



Comments:

Please sign:
Parent / Caregiver

