

Name: \_\_\_\_\_

Hand in on: \_\_\_\_\_

### A: Number facts

Try not to use a calculator. Have someone time how long it takes you & record this time in the box below.

#### Adding & Subtracting

1.  $44 + 42 =$  .....
2.  $13 + 36 =$  .....
3.  $98 + 328 =$  .....
4.  $255 + 59 =$  .....
5.  $365 - 420 =$  .....
6.  $484 - 273 =$  .....
7.  $132 - 49 =$  .....
8.  $437 - 69 =$  .....

#### Multiplying & Dividing

9.  $3 \times 10 =$  .....
10.  $3 \times 6 =$  .....
11.  $4 \times 9 =$  .....
12.  $6 \times 8 =$  .....
13.  $7 \times 5 =$  .....
14.  $7 \times 9 =$  .....
15.  $18 \div 3 =$  .....
16.  $30 \div 6 =$  .....
17.  $40 \div 4 =$  .....
18.  $24 \div 8 =$  .....
19.  $63 \div 7 =$  .....
20.  $72 \div 9 =$  .....

Time taken:

### D: Alphabetical order

In your homework book, list these words in alphabetical order;

spoil, splendid, sometime, spotted, solo, someone, something

Write sentences using 3 of these words to show you understand their meanings.

Have you spent some time this week learning or revising your


**basic number facts?**

Yes / No (circle one)



### B: Listing 'doing' words

Write down the verbs that you think of, as you look at each picture.



### C: Stem & leaf graphs

Stem & leaf graphs are called this because they look like a stem and leaf.

Example: 

2	0, 2, 3, 9
3	3, 5, 5, 6, 7, 8
4	1, 5, 8, 9

The stem part has the numbers 2, 3 & 4 which mean 20, 30 & 40

The leaf part has the last digit of the number recorded.

For this stem & leaf graph the numbers when listed would be

20, 22, 23, 29, 33, 35, 35, 36, 37, 38, 41, 45, 48 & 49.

1. Complete the list of numbers in the stem & leaf graph, the first 3 have already been done for you.



6	5, 4, 2, 7, 9
7	2, 4, 4, 7, 8, 5, 9
8	2, 4, 7, 5, 7, 2
9	0, 5, 4, 3, 8

65, 64, 62, ....., ....., ....., ....., ....., ....., ....., .....

2. Add these numbers to the stem & leaf graph above, 95, 78, 62, 71, 64, 74, 83

### E: One word answers

Write one word that means ...

1. a person who looks after your teeth.
2. to take three wickets in a row.
3. to be bowled out without scoring any runs
4. boys or men who serve at tables.
5. an instrument for measuring time.
6. a ship that travels below the surface of the sea.



Do you have any spelling words to learn this week?  
Yes / No (circle one)

### D: Alphabetical order

In your homework book, list these words in alphabetical order;

spoil, splendid, sometime, spotted, solo, someone, something

Write sentences using 3 of these words to show you understand their meanings.

Have you spent some time this week learning or revising your

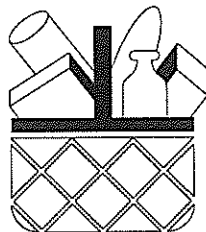
**basic number facts?**

Yes / No (circle one)



### G: What will it cost?

What does it cost Trevor to go shopping?




### Trevor's List

bread	\$1.75
milk	\$2.35
fruit	\$8.75
biscuits	\$2.85
TV guide	\$3.40
cheese	\$6.80
juice	\$7.75
cat food	\$5.85

### F: Number pyramid

Complete this number pyramid to find the number at the top.



Have you read a book or part of a book this week, just for FUN?

Yes / No (circle one)



Comments: .....

.....

.....

Please sign:  
Parent / Caregiver

